


Add and subtract fractions with the same denominator.

These pizzas are divided into $\frac{1}{4}$ s.

First $\frac{3}{4}$ is eaten.


Then another $\frac{2}{4}$.

How many $\frac{1}{4}$ s have been eaten altogether?

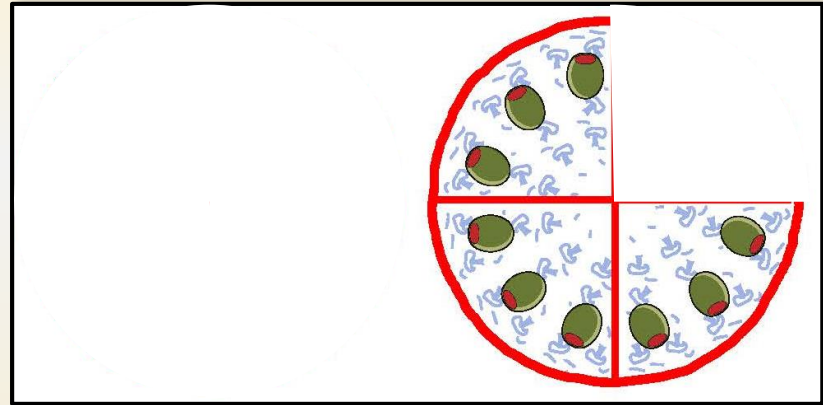


$$\frac{3}{4} + \frac{2}{4} = \frac{5}{4}$$

How else can we write $\frac{5}{4}$?



As a **mixed number**:
 $1\frac{1}{4}$




Add and subtract fractions with the same denominator.

These pizzas are divided into $\frac{1}{5}$ s.

First $\frac{4}{5}$ are eaten.

Then another $\frac{3}{5}$.



How many $\frac{1}{5}$ s have been eaten altogether?

$$\frac{4}{5} + \frac{3}{5} = \frac{7}{5}$$

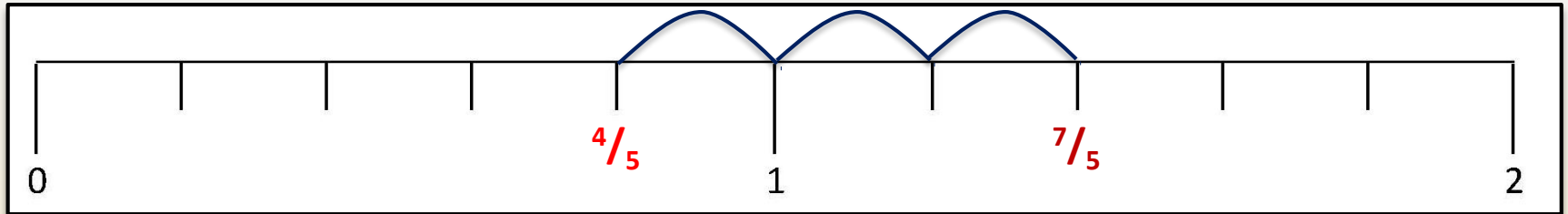
How else can we write $\frac{7}{5}$?

As a mixed number:

$$1\frac{2}{5}$$

Add and subtract fractions with the same denominator.

We can also show this on a **fifths** numberline.



Mark $\frac{4}{5}$

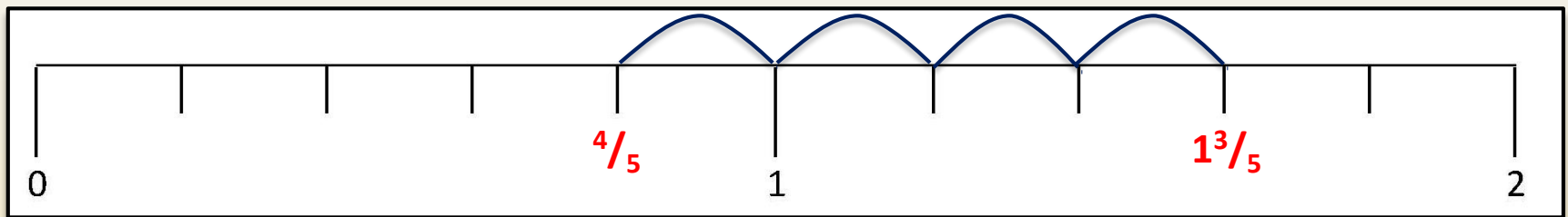
Count on $\frac{3}{5}$

$$\frac{4}{5} + \frac{3}{5} = \frac{7}{5} \text{ or } \frac{12}{5}$$

Add and subtract fractions with the same denominator.

We can also use the numberline to subtract.

Let's try $1\frac{3}{5} - \frac{4}{5}$.



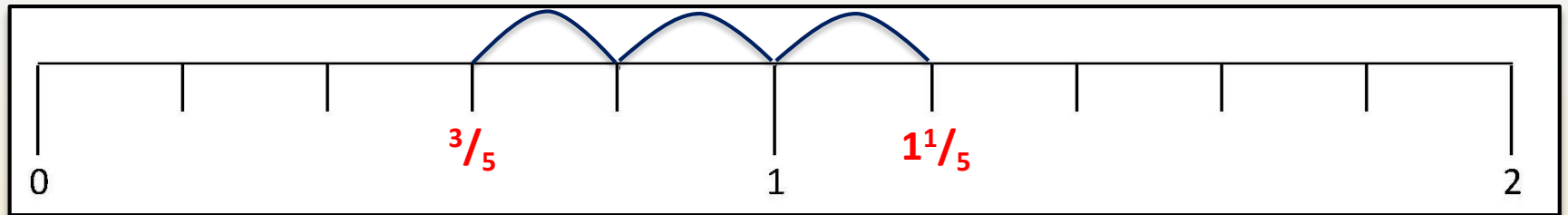
Count back $\frac{4}{5}$

Mark on $1\frac{3}{5}$

$$1\frac{3}{5} - \frac{4}{5} = \frac{4}{5}$$

Add and subtract fractions with the same denominator.

Let's try $1\frac{1}{5} - \frac{3}{5}$.



Count back $\frac{3}{5}$.

Mark on $1\frac{1}{5}$.

$$1\frac{1}{5} - \frac{3}{5} = \frac{3}{5}$$